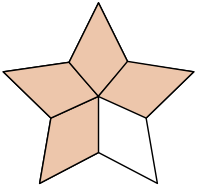


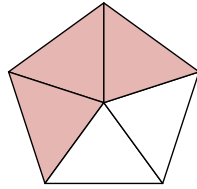
NAME \_\_\_\_\_

SCORE \_\_\_\_\_

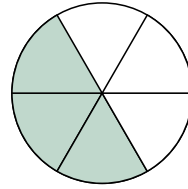
## VISUAL FRACTIONS

Write the fractions that the shaded sections represent for each shape:

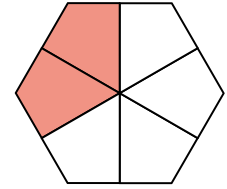


$$\frac{4}{5}$$


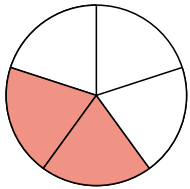
\_\_\_\_\_



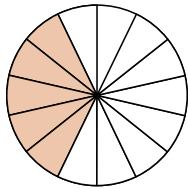
\_\_\_\_\_



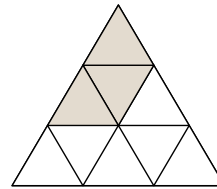
\_\_\_\_\_



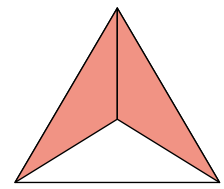
\_\_\_\_\_



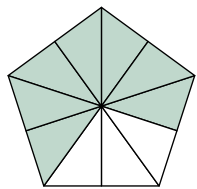
\_\_\_\_\_



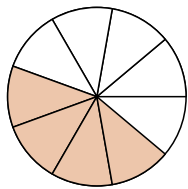
\_\_\_\_\_



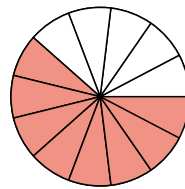
\_\_\_\_\_



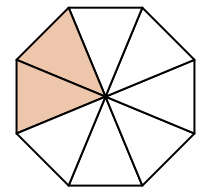
\_\_\_\_\_



\_\_\_\_\_



\_\_\_\_\_



\_\_\_\_\_

