









Name : _____




Fill in the correct tens and ones for the given numbers.

1)  +  = 




$$\frac{1}{7} + \frac{2}{7} = \frac{\quad}{\quad}$$

2)  +  = 




$$\frac{1}{11} + \frac{2}{11} = \frac{\quad}{\quad}$$

3)  +  = 

$$\frac{1}{4} + \frac{1}{4} = \frac{\quad}{\quad}$$

4)  +  = 

$$\frac{3}{11} + \frac{4}{11} = \frac{\quad}{\quad}$$

5)  +  = 

$$\frac{1}{5} + \frac{2}{5} = \frac{\quad}{\quad}$$