

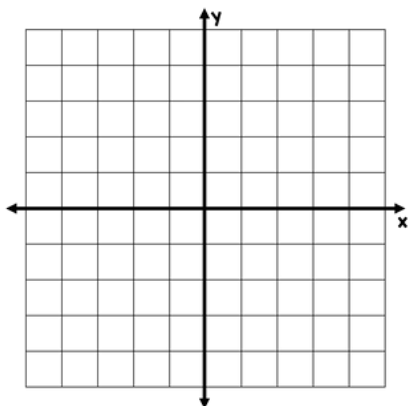


GRAPHING QUADRATIC FUNCTIONS

For each quadratic equation, make a table of values and a graph.

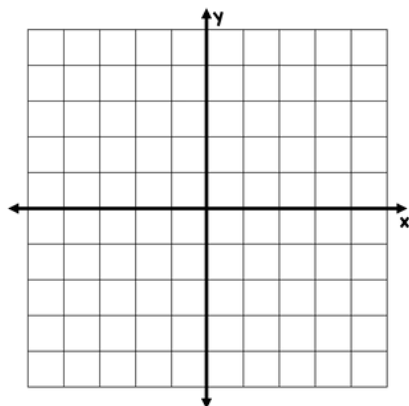
$$y = x^2$$

x	y



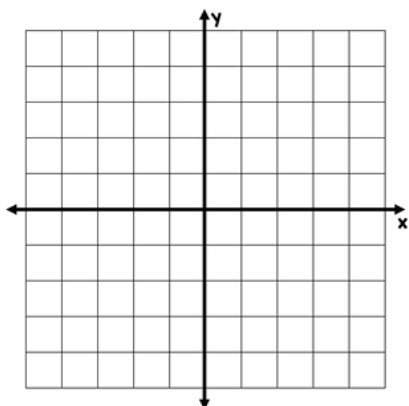
$$y = x^2 + 1$$

x	y



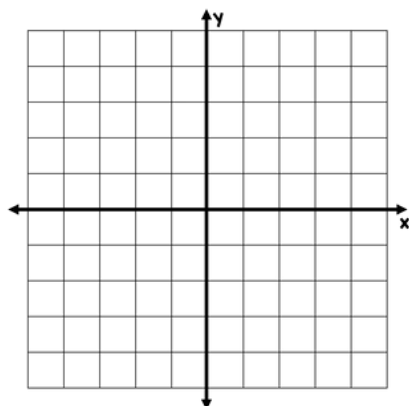
$$y = -x^2$$

x	y



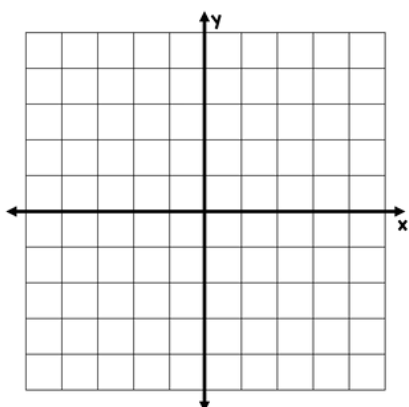
$$y = -x^2 + 1$$

x	y



$$y = 2x^2$$

x	y



$$y = -2x^2 - 1$$

x	y

