



Name : \_\_\_\_\_

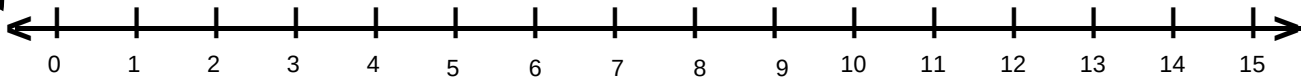
Teacher : \_\_\_\_\_

Score : \_\_\_\_\_

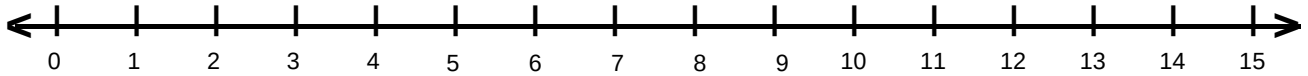
Date : \_\_\_\_\_



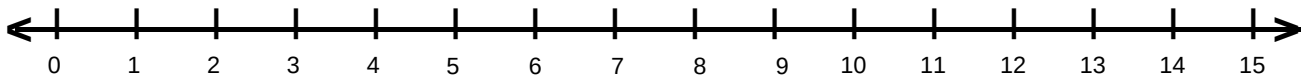
Create the number line from the problem.



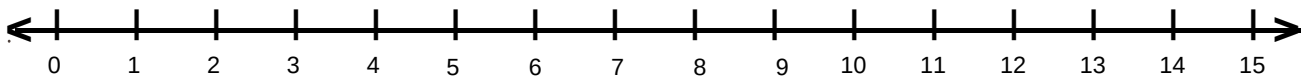
$$8+1=$$



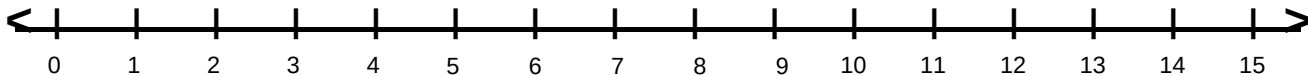
$$1+9=$$



$$5+3=$$



$$3+6=$$



$$6+2=$$