



Name : _____

Teacher : _____

Score : _____

Date : _____

TRICK
OR
TREAT





VISUAL ADDITION



Write out an addition equation based on the shapes given.

1) 
+ 



_____ + _____ = _____

2) 
+ 



_____ + _____ = _____

3) 
+ 

_____ + _____ = _____

4) 
+ 

_____ + _____ = _____

5) 
+ 

_____ + _____ = _____

6) 
+ 

_____ + _____ = _____