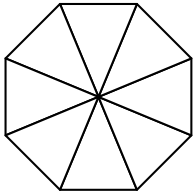


NAME

DATE

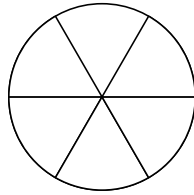
# VISUAL FRACTIONS

Using the diagrams provided, color in the sections to show the fraction clue provided. When finished write out the fraction in words.



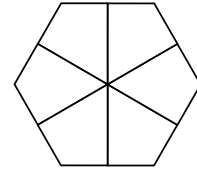
$$\frac{1}{2}$$

\_\_\_\_\_



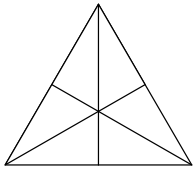
$$\frac{5}{6}$$

\_\_\_\_\_



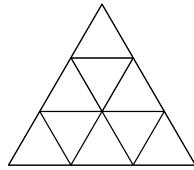
$$\frac{1}{3}$$

\_\_\_\_\_



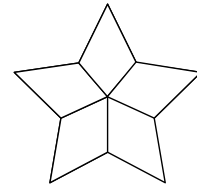
$$\frac{2}{3}$$

\_\_\_\_\_



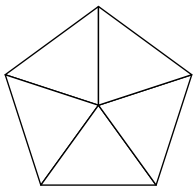
$$\frac{2}{9}$$

\_\_\_\_\_



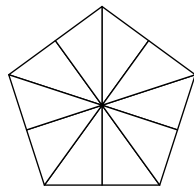
$$\frac{4}{5}$$

\_\_\_\_\_



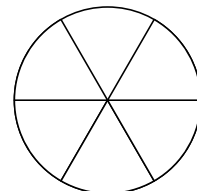
$$\frac{3}{5}$$

\_\_\_\_\_



$$\frac{2}{5}$$

\_\_\_\_\_



$$\frac{1}{6}$$

\_\_\_\_\_

